

**Q. 1 – Q. 5 carry one mark each.**

- Q.1 John Thomas, an \_\_\_\_\_ writer, passed away in 2018.
- (A) imminent (B) prominent  
(C) eminent (D) dominant
- Q.2 \_\_\_\_\_ I permitted him to leave, I wouldn't have had any problem with him being absent, \_\_\_\_\_ I?
- (A) Had, wouldn't (B) Have, would  
(C) Had, would (D) Have, wouldn't
- Q.3 A worker noticed that the hour hand on the factory clock had moved by 225 degrees during her stay at the factory. For how long did she stay in the factory?
- (A) 3.75 hours (B) 4 hours and 15 mins  
(C) 8.5 hours (D) 7.5 hours
- Q.4 The sum and product of two integers are 26 and 165 respectively. The difference between these two integers is \_\_\_\_\_.
- (A) 2 (B) 3 (C) 4 (D) 6
- Q.5 The minister avoided any mention of the issue of women's reservation in the private sector. He was accused of \_\_\_\_\_ the issue.
- (A) collaring (B) skirting  
(C) tying (D) belting

**Q. 6 – Q. 10 carry two marks each.**

- Q.6 Under a certain legal system, prisoners are allowed to make one statement. If their statement turns out to be true then they are hanged. If the statement turns out to be false then they are shot. One prisoner made a statement and the judge had no option but to set him free. Which one of the following could be that statement?
- (A) I did not commit the crime  
(B) I committed the crime  
(C) I will be shot  
(D) You committed the crime

Q.7 A person divided an amount of Rs. 100,000 into two parts and invested in two different schemes. In one he got 10% profit and in the other he got 12%. If the profit percentages are interchanged with these investments he would have got Rs.120 less. Find the ratio between his investments in the two schemes.

- (A) 9 : 16                      (B) 11 : 14                      (C) 37 : 63                      (D) 47 : 53

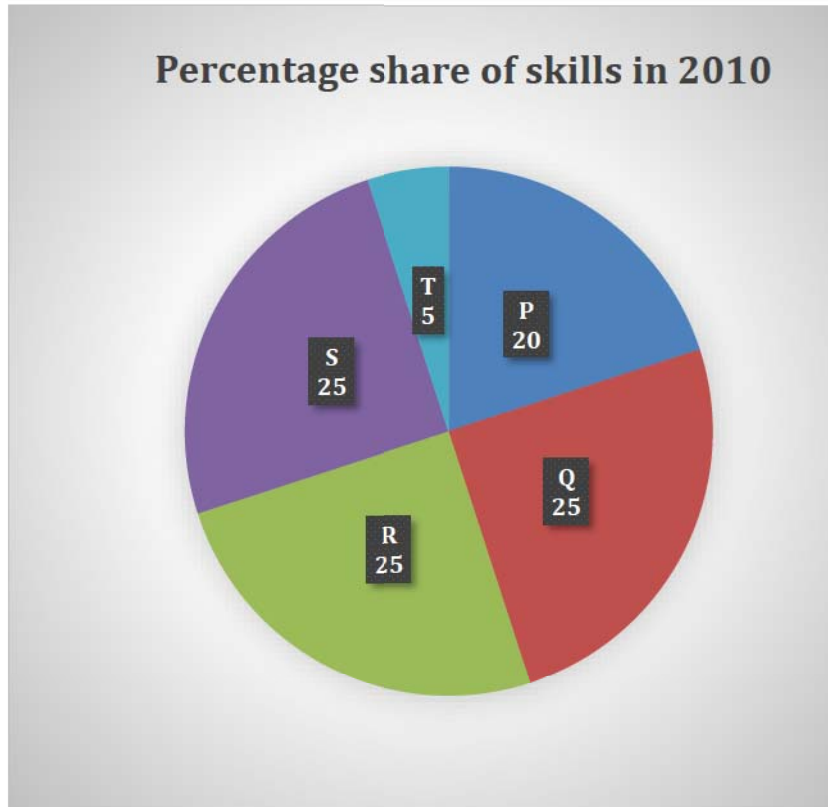
Q.8 Congo was named by Europeans. Congo's dictator Mobuto later changed the name of the country and the river to Zaire with the objective of Africanising names of persons and spaces. However, the name Zaire was a Portuguese alteration of *Nzadi o Nzere*, a local African term meaning 'River that swallows Rivers'. Zaire was the Portuguese name for the Congo river in the 16th and 17th centuries.

Which one of the following statements can be inferred from the paragraph above?

- (A) Mobuto was not entirely successful in Africanising the name of his country  
(B) The term *Nzadi o Nzere* was of Portuguese origin  
(C) Mobuto's desire to Africanise names was prevented by the Portuguese  
(D) As a dictator Mobuto ordered the Portuguese to alter the name of the river to Zaire

**GATE 2019 General Aptitude (GA) Set-2**

- Q.9 A firm hires employees at five different skill levels P, Q, R, S, T. The shares of employment at these skill levels of total employment in 2010 is given in the pie chart as shown. There were a total of 600 employees in 2010 and the total employment increased by 15% from 2010 to 2016. The total employment at skill levels P, Q and R remained unchanged during this period. If the employment at skill level S increased by 40% from 2010 to 2016, how many employees were there at skill level T in 2016?



- (A) 30                      (B) 35                      (C) 60                      (D) 72
- Q.10 M and N had four children P, Q, R and S. Of them, only P and R were married. They had children X and Y respectively. If Y is a legitimate child of W, which one of the following statements is necessarily FALSE?
- (A) M is the grandmother of Y  
(B) R is the father of Y  
(C) W is the wife of R  
(D) W is the wife of P

**END OF THE QUESTION PAPER**

**Q. 1 – Q. 25 carry one mark each.**

- Q.1 The **INCORRECT** statement about the solid-state structure of CsCl and CaF<sub>2</sub> is:
- (A) Cations in both solids exhibit coordination number 8.
  - (B) CsCl has *bcc* type structure and CaF<sub>2</sub> has cubic close pack structure.
  - (C) Radius ratio for Cs/Cl and Ca/F is 0.93 and 0.73, respectively.
  - (D) Both exhibit close pack structure.
- Q.2 The **INCORRECT** statement about the interhalogen compound ICl<sub>3</sub> is:
- (A) It exists as a dimer.
  - (B) Geometry around the iodine is tetrahedral in solid-state.
  - (C) It decomposes as ICl and Cl<sub>2</sub> in gas-phase.
  - (D) Liquid ICl<sub>3</sub> conducts electricity.
- Q.3 Among the following carbon allotropes, the one with discrete molecular structure is
- (A) Diamond      (B)  $\alpha$ -Graphite      (C)  $\beta$ -Graphite      (D) Fullerene
- Q.4 The **INCORRECT** statement about the silicones is:
- (A) They are thermally unstable because of the Si–C bond.
  - (B) They are insoluble in water.
  - (C) They are organosilicon polymers.
  - (D) They have stable silica-like skeleton (–Si–O–Si–O–Si–).
- Q.5 The  $\Delta_o$  value of  $[\text{Ni}(\text{H}_2\text{O})_6]^{2+}$  is  $8500 \text{ cm}^{-1}$ . The  $\Delta_o$  values for  $[\text{NiCl}_6]^{4-}$  and  $[\text{Ni}(\text{NH}_3)_6]^{2+}$  compared to  $[\text{Ni}(\text{H}_2\text{O})_6]^{2+}$  are
- (A) higher and lower, respectively.
  - (B) lower and higher, respectively.
  - (C) higher in both complex ions.
  - (D) lower in both complex ions.

Q.6 In Freundlich isotherm, a linear relationship is obtained in the plot of

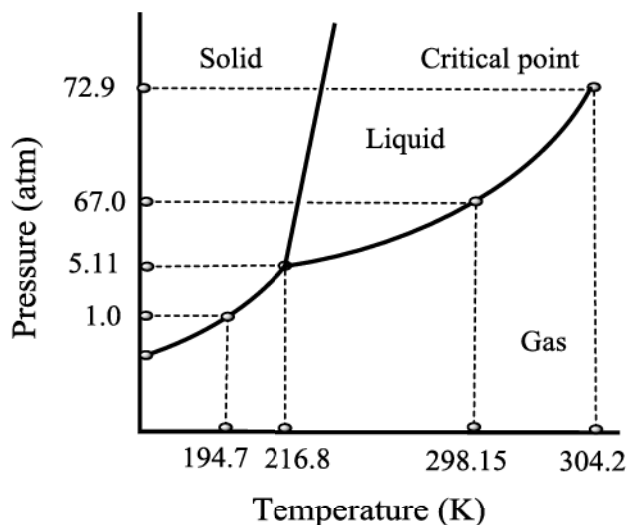
( $\theta$  = surface coverage and  $p$  = partial pressure of the gas)

- (A)  $\theta$  vs  $p$ . (B)  $\ln(\theta)$  vs  $\ln(p)$ .  
 (C)  $\ln(\theta)$  vs  $p$ . (D)  $\theta$  vs  $\ln(p)$ .

Q.7 Micelle formation is accompanied by the

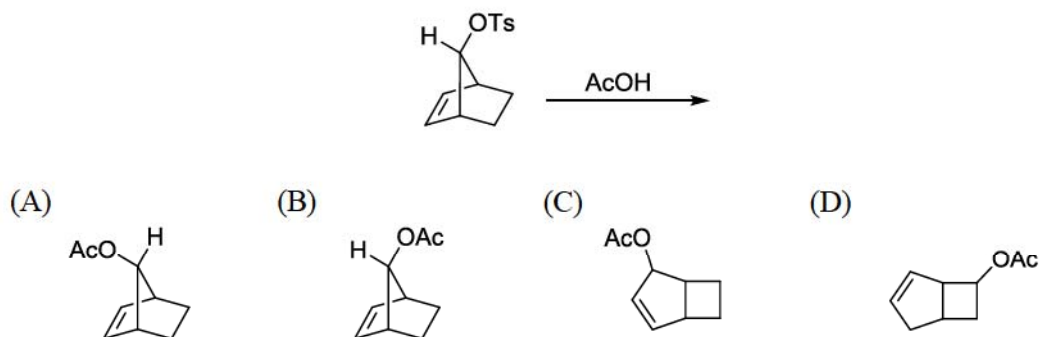
- (A) decrease in overall entropy due to ordering.  
 (B) increase in overall entropy mostly due to increase in solvent entropy.  
 (C) increase in overall entropy mostly due to increase in solute entropy.  
 (D) increase in overall entropy and decrease in enthalpy.

Q.8 Consider the following phase diagram of CO<sub>2</sub> (not to scale). At equilibrium, the **INCORRECT** statement is:

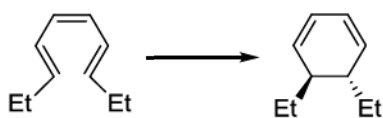


- (A) At 200 K, on increasing the pressure from 1 to 50 atm, CO<sub>2</sub> gas condenses to liquid.  
 (B) It is not possible to obtain liquid CO<sub>2</sub> from gaseous CO<sub>2</sub> below 5.11 atm.  
 (C) Both liquid and gas phase of CO<sub>2</sub> coexist at 298.15 K and 67 atm.  
 (D) With increasing pressure, the melting point of solid CO<sub>2</sub> increases.

Q.9 The major product formed in the following reaction is

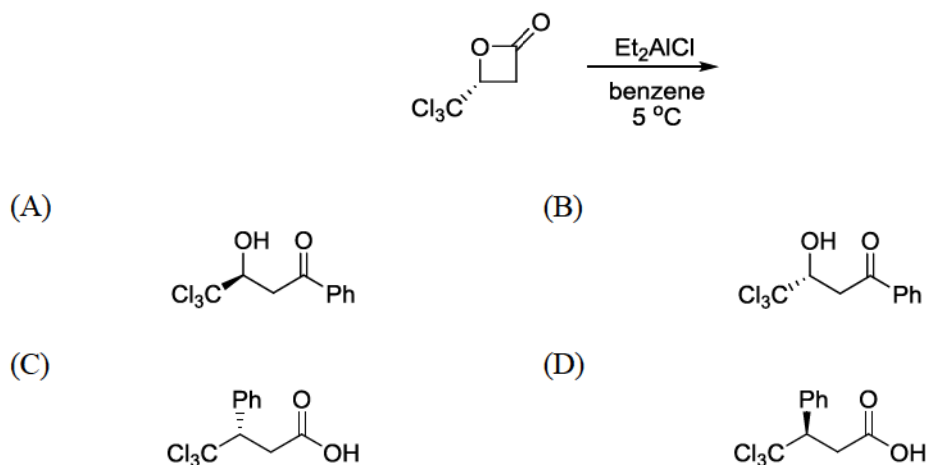


Q.10 The Woodward-Hoffmann condition to bring out the following transformation is



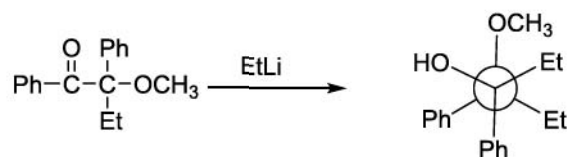
- (A)  $\Delta$ , conrotatory                      (B)  $\Delta$ , disrotatory  
 (C)  $h\nu$ , disrotatory                      (D)  $h\nu$ , conrotatory

Q.11 The major product formed in the following reaction is



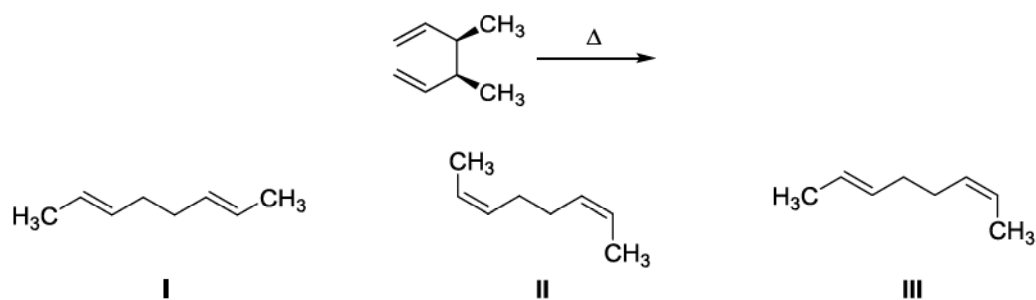


Q.12 In the following reaction, the stereochemistry of the major product is predicted by the



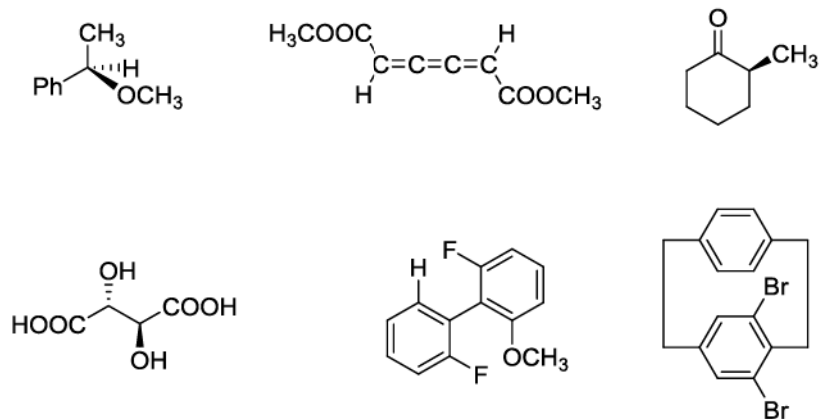
- (A) Cram's model  
 (B) Cram's chelation model  
 (C) Felkin model  
 (D) Felkin-Anh model

Q.13 The product(s) formed in the following reaction is (are)

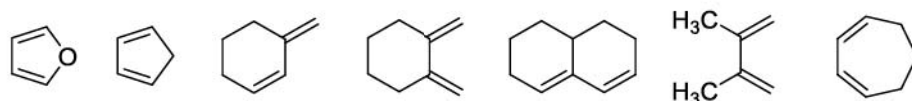


- (A) I only  
 (B) II only  
 (C) III only  
 (D) mixture of I and II

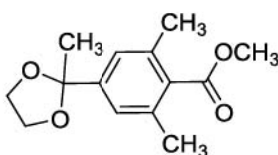
Q.14 Among the following compounds, the number of compounds that **DO NOT** exhibit optical activity at room temperature is \_\_\_\_\_.



Q.15 The number of following diene(s) that undergo Diels-Alder reaction with methyl acrylate is \_\_\_\_\_.



Q.16 The number of  $^1\text{H}$  NMR signals observed for the following compound is \_\_\_\_\_.



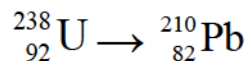
Q.17 The number of CO stretching bands in IR spectrum of trigonal bipyramidal  $\text{cis-M}(\text{CO})_3\text{L}_2$  is \_\_\_\_\_.

(M = metal and L = monodentate ligand)

Q.18 On heating a sample of 25 mg hydrated compound (molecular weight = 250 g/mol) in thermogravimetric analysis, 16 mg of dehydrated compound remains. The number of water molecules lost per molecule of hydrated compound is \_\_\_\_\_.

(Molecular weight of water = 18 g/mol)

Q.19 The total number of  $\alpha$  and  $\beta$  particles emitted in the following radioactive decay is \_\_\_\_\_.





Q.20 An ideal gas occupies an unknown volume  $V$  liters (L) at a pressure of 12 atm. The gas is expanded isothermally against a constant external pressure of 2 atm so that its final volume becomes 3 L. The work involved for this expansion process is \_\_\_\_\_ cal. (Round off to two decimal places)

(Gas constant  $R = 0.082 \text{ L atm mol}^{-1} \text{ K}^{-1} = 2 \text{ cal mol}^{-1} \text{ K}^{-1}$ )

Q.21 The entropy change for the melting of 'x' moles of ice (heat of fusion is  $80 \text{ cal g}^{-1}$ ) at 273 K and 1 atm pressure is  $28.80 \text{ cal K}^{-1}$ . The value of 'x' is \_\_\_\_\_. (Round off to two decimal places)

(Molecular weight of water = 18 g/mol)

Q.22 Consider a two-state system at thermal equilibrium having energies 0 and  $2k_B T$  for which the degeneracies are 1 and 2, respectively. The value of the partition function at the same absolute temperature  $T$  is \_\_\_\_\_. (Round off to two decimal places)

( $k_B$  is the Boltzmann constant)

Q.23 Consider a system of three identical and distinguishable non-interacting particles and three available nondegenerate single particle energy levels having energies 0,  $\epsilon$  and  $2\epsilon$ . The system is in contact with a heat bath of temperature  $T$  K. A total energy of  $2\epsilon$  is shared by these three particles. The number of ways the particles can be distributed is \_\_\_\_\_.

Q.24 In a 400 MHz  $^1\text{H}$  NMR spectrometer, a proton resonates at 1560 Hz higher than that of tetramethylsilane. The chemical shift value of this proton is \_\_\_\_\_ ppm. (Round off to one decimal place)

(Chemical shift of tetramethylsilane is fixed at zero ppm)

Q.25 Gas phase bond length and dipole moment of a compound (MX) is 3 Å and 10.8 D, respectively. The ionic character in gas phase MX is \_\_\_\_\_%. (Round off to one decimal place)

( $1\text{D} = 3.336 \times 10^{-30} \text{ C m}$ )

**Q. 26 – Q. 55 carry two marks each.**

Q.26 The experimentally observed magnetic moment values, which match well with the spin-only values for the pair of aqueous ions is

(Atomic number: Cr = 24, Co = 27, Gd = 64, Tb = 65, Dy = 66 and Lu = 71)

- (A) Cr(III) and Gd(III)                      (B) Co(II) and Gd(III)  
 (C) Cr(III) and Dy(III)                      (D) Lu(III) and Tb(III)

Q.27 Among the following compounds, a normal spinel is

- (A)  $MgFe_2O_4$                                   (B)  $ZnFe_2O_4$   
 (C)  $CoFe_2O_4$                                   (D)  $CuFe_2O_4$

Q.28 Following are the examples of silicate minerals

Zircon, $ZrSiO_4$	Beryl, $Be_3Al_2Si_6O_{18}$	Pyrophyllite, $Al_2(OH)_2[(Si_2O_5)_2]$
<b>I</b>	<b>II</b>	<b>III</b>

The correct structural description of the minerals is

- (A) **I** – Ortho silicate, **II** – Cyclic silicate and **III** – Sheet silicate  
 (B) **I** – Ortho silicate, **II** – Sheet silicate and **III** – Cyclic silicate  
 (C) **I** – Cyclic silicate, **II** – Sheet silicate and **III** – Ortho silicate  
 (D) **I** – Sheet silicate, **II** – Ortho silicate and **III** – Cyclic silicate

Q.29 In the EPR spectrum of a methyl radical, the number of lines and their relative intensities, respectively, are

- (A) 1 and 1                      (B) 3 and 1:2:1                      (C) 4 and 1:2:2:1                      (D) 4 and 1:3:3:1

Q.30 The product obtained in the reaction of  $Mn_2(CO)_{10}$  with  $Br_2$  is

- (A)  $Mn(CO)_5Br$                       (B)  $Mn_2(CO)_8Br_2$                       (C)  $Mn(CO)_4Br_2$                       (D)  $Mn_2(CO)_9Br$

Q.31 The correct molecular representation of  $W(Cp)_2(CO)_2$  is

(Cp = cyclopentadienyl)

- (A)  $[W(\eta^1-Cp)(\eta^3-Cp)(CO)_2]$                       (B)  $[W(\eta^1-Cp)(\eta^5-Cp)(CO)_2]$   
 (C)  $[W(\eta^3-Cp)(\eta^5-Cp)(CO)_2]$                       (D)  $[W(\eta^5-Cp)_2(CO)_2]$

Q.32 Match the metalloproteins with their respective functions.

P	Ferritin	I	Electron transfer
Q	Rubredoxin	II	Acid-base catalysis
R	Cobalamin	III	Metal storage
S	Carbonic anhydrase	IV	Methyl transfer

- (A) P – III; Q – II; R – I; S – IV  
 (B) P – III; Q – I; R – IV; S – II  
 (C) P – IV; Q – I; R – III; S – II  
 (D) P – IV; Q – II; R – I; S – III

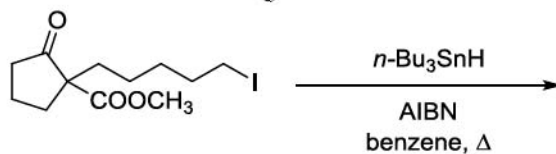
Q.33 Suppose the wave function of a one dimensional system is

$$\psi = \sin(kx) \exp(3ikx).$$

In an experiment measuring the momentum of the system, one of the expected outcomes is

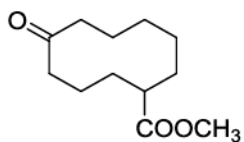
- (A) 0                      (B)  $\hbar k$                       (C)  $2 \hbar k$                       (D)  $3 \hbar k$

Q.34 The major product formed in the following reaction is

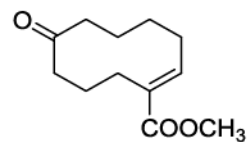


(AIBN = azobisisobutyronitrile)

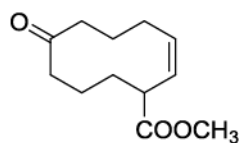
(A)



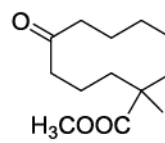
(B)



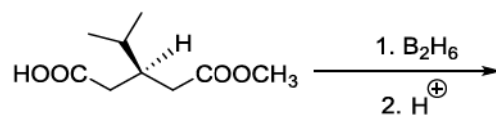
(C)



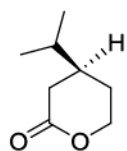
(D)



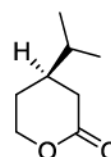
Q.35 The major product formed in the following reaction is



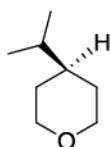
(A)



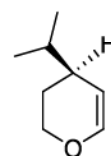
(B)



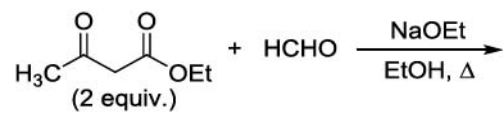
(C)



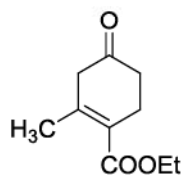
(D)



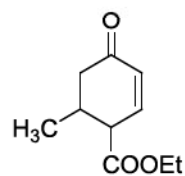
Q.36 The major product formed in the following reaction is



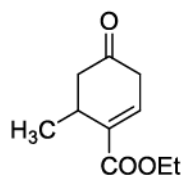
(A)



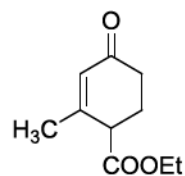
(B)



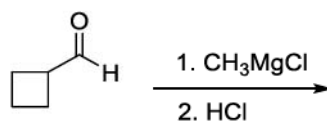
(C)



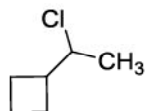
(D)



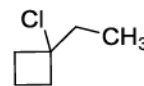
Q.37 The major product formed in the following reaction is



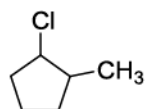
(A)



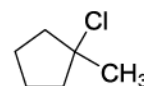
(B)



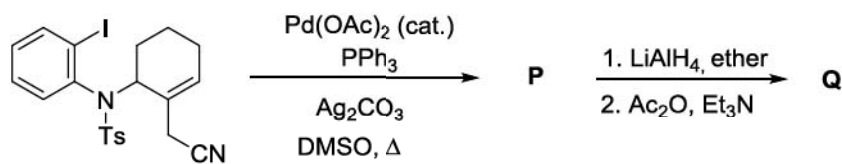
(C)



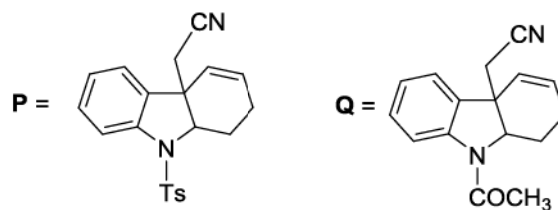
(D)



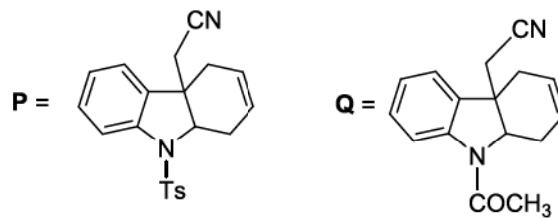
Q.38 In the following reaction sequence, the products **P** and **Q** are



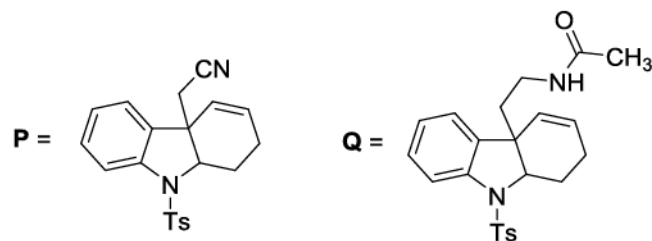
(A)



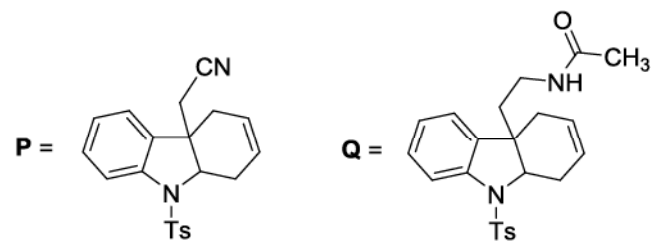
(B)



(C)

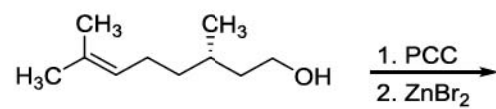


(D)



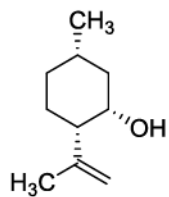


Q.39 The major product formed in the following reaction is

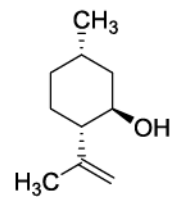


(PCC = pyridinium chlorochromate)

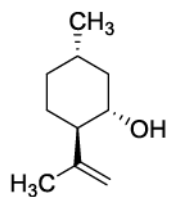
(A)



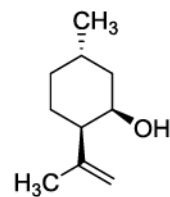
(B)



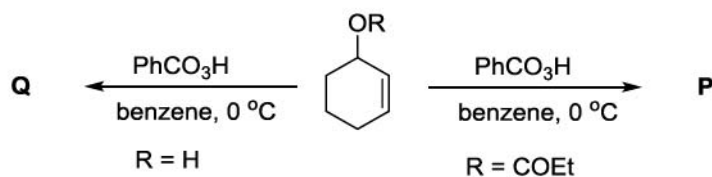
(C)



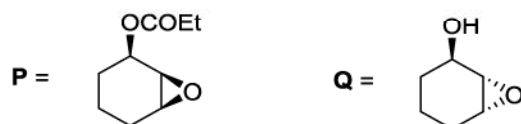
(D)




Q.40 In the following reactions, the major products **P** and **Q** are




(A)



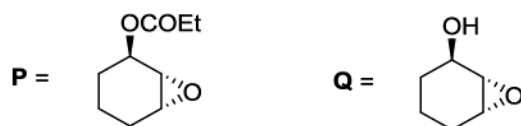
(B)



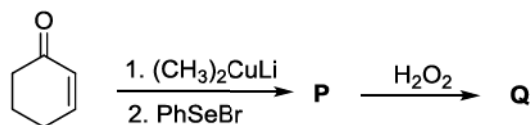
(C)



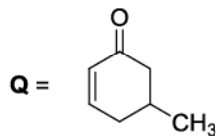
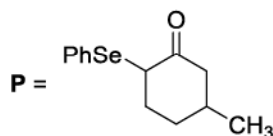
(D)



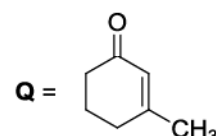
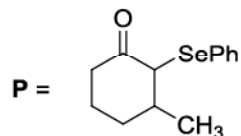
Q.41 In the following reaction sequence, the products **P** and **Q** are



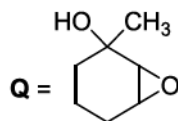
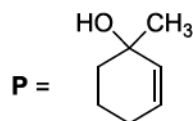
(A)



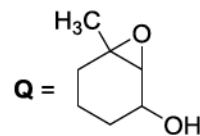
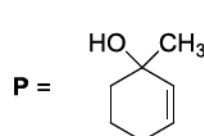
(B)



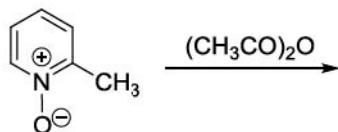
(C)



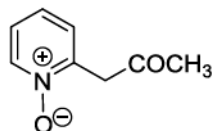
(D)



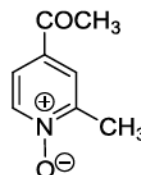
Q.42 The major product formed in the following reaction is



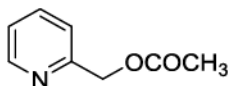
(A)



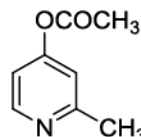
(B)



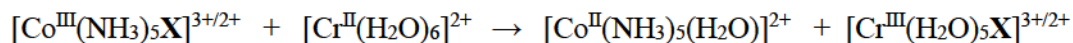
(C)



(D)



Q.43 The rate of the following redox reaction is slowest when **X** is

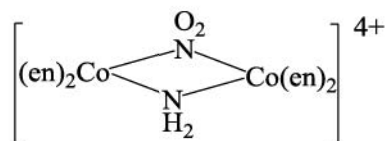
(A)  $\text{H}_2\text{O}$ (B)  $\text{NH}_3$ (C)  $\text{Cl}^-$ (D)  $\text{N}_3^-$ 

Q.44 A complex is composed of one chromium ion, three bromides and six water molecules. Upon addition of excess  $\text{AgNO}_3$ , 1.0 g aqueous solution of the complex gave 0.94 g of  $\text{AgBr}$ . The molecular formula of the complex is

(Atomic weight:  $\text{Cr} = 52$ ,  $\text{Br} = 80$ ,  $\text{Ag} = 108$ ,  $\text{O} = 16$  and  $\text{H} = 1$ )

(A)  $[\text{Cr}(\text{H}_2\text{O})_6]\text{Br}_3$ (B)  $[\text{Cr}(\text{H}_2\text{O})_5\text{Br}]\text{Br}_2 \cdot \text{H}_2\text{O}$ (C)  $[\text{Cr}(\text{H}_2\text{O})_4\text{Br}_2]\text{Br} \cdot 2\text{H}_2\text{O}$ (D)  $[\text{Cr}(\text{H}_2\text{O})_3\text{Br}_3] \cdot 3\text{H}_2\text{O}$

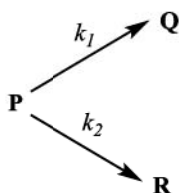
Q.45 The number of possible optically active isomer(s) for the following complex is \_\_\_\_\_.



en = ethylenediamine

Q.46 The specific rotation of optically pure (*R*)-2-bromobutane is  $-112.00$ . A given sample of 2-bromobutane exhibited a specific rotation of  $-82.88$ . The percentage of (*S*)-(+)-enantiomer present in this sample is \_\_\_\_\_.

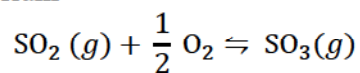
Q.47 Consider the following two parallel irreversible first order reactions at temperature T,



where  $k_1$  and  $k_2$  are the rate constants and their values are  $5 \times 10^{-2}$  and  $15 \times 10^{-2} \text{ min}^{-1}$ , respectively, at temperature T. If the initial concentration of the reactant 'P' is  $4 \text{ mol L}^{-1}$ , then the concentration of product 'R' after 10 min of reaction is \_\_\_\_\_  $\text{mol L}^{-1}$ . (Round off to two decimal places)

(Assume only P is present at the beginning of the reaction.)

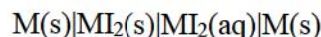
Q.48 Consider the following equilibrium



At 298 K, the standard molar Gibbs energies of formation,  $\Delta_f G^0$ , of  $\text{SO}_2(g)$  and  $\text{SO}_3(g)$  are  $-300$  and  $-371 \text{ kJ mol}^{-1}$ , respectively. The value of the equilibrium constant,  $K_p$ , at this temperature is \_\_\_\_\_  $\times 10^{10}$ . (Round off to the nearest integer)

(Gas constant  $R = 8.31 \text{ J mol}^{-1} \text{ K}^{-1}$ )

Q.49 Consider the electrochemical cell



where 'M' is a metal. At 298 K, the standard reduction potentials are

$E_{M^{2+}(aq)/M(s)}^0 = -0.12 \text{ V}$ ,  $E_{MI_2(s)/M(s)}^0 = -0.36 \text{ V}$  and the temperature coefficient is  $\left(\frac{\partial E_{\text{cell}}^0}{\partial T}\right)_p = 1.5 \times 10^{-4} \text{ V K}^{-1}$ . At this temperature the standard enthalpy change for the overall cell reaction,  $\Delta_r H^0$ , is \_\_\_\_\_  $\text{kJ mol}^{-1}$ . (Round off to two decimal places)

(Faraday constant  $F = 96500 \text{ C mol}^{-1}$ )

Q.50 The normal boiling point of a compound (X) is 350 K (heat of vaporization,  $\Delta_{\text{vap}}H_v = 30 \text{ kJ mol}^{-1}$ ). The pressure required to boil 'X' at 300 K is \_\_\_\_\_ Torr. (Round off to two decimal places)

(Ignore the temperature variation of  $\Delta_{\text{vap}}H_v$ ; Gas constant  $R = 8.31 \text{ J mol}^{-1} \text{ K}^{-1}$  and  $1 \text{ atm} = 760 \text{ Torr}$ )

Q.51 For a bimolecular gas phase reaction  $P + Q \rightarrow R$ , the pre-exponential factor is  $1 \times 10^{13} \text{ dm}^3 \text{ mol}^{-1} \text{ s}^{-1}$ . The standard entropy of activation at  $25 \text{ }^\circ\text{C}$  is \_\_\_\_\_  $\text{J K}^{-1} \text{ mol}^{-1}$ . (Round off to two decimal points)

(The standard concentration  $c^\circ = 1 \text{ mol dm}^{-3}$ ; Planck constant  $h = 6.62 \times 10^{-34} \text{ J s}$ ; Boltzmann constant  $k_B = 1.38 \times 10^{-23} \text{ J K}^{-1}$ ; Gas constant  $R = 8.31 \text{ J mol}^{-1} \text{ K}^{-1}$ )

Q.52 Character table of point group  $D_8$  is given below.

$D_8$	E	$2C_8$	$2C_4$	$2C_8^3$	$C_2$	$4C_2'$	$4C_2''$
$A_1$	<b>a</b>	1	1	1	1	1	1
$A_2$	<b>b</b>	1	1	1	1	<b>h</b>	<b>i</b>
$B_1$	<b>c</b>	-1	1	-1	1	1	<b>j</b>
$B_2$	<b>d</b>	-1	1	-1	1	-1	1
$E_1$	<b>e</b>	$\sqrt{2}$	0	$-\sqrt{2}$	-2	0	0
$E_2$	<b>f</b>	0	-2	0	<b>k</b>	0	0
$E_3$	<b>g</b>	$-\sqrt{2}$	0	$\sqrt{2}$	-2	0	0

Value of  $(\mathbf{a} + \mathbf{b} + \mathbf{c} + \mathbf{d} + \mathbf{e} + \mathbf{f} + \mathbf{g} + \mathbf{h} + \mathbf{i} + \mathbf{j} + \mathbf{k})$  is equal to \_\_\_\_\_.

Q.53 If  $\langle \alpha | \hat{S}_x \hat{S}_y - \hat{S}_y \hat{S}_x | \alpha \rangle = i\hbar^2 a$ , where  $\hat{S}_x$  and  $\hat{S}_y$  are spin angular momentum operators and  $|\alpha\rangle$  is spin up eigen function, then the value of 'a' is \_\_\_\_\_. (Round off to one decimal place)

Q.54 A particle in one dimensional box of length  $2a$  with potential energy

$$V = \begin{cases} 0 & |x| < a \\ \infty & |x| > a \end{cases}$$

is perturbed by the potential  $V' = cx$  eV, where  $c$  is a constant. The 1<sup>st</sup> order correction to the 1<sup>st</sup> excited state of the system is \_\_\_\_\_  $\times c$  eV.

Q.55 Consider a two dimensional harmonic oscillator with angular frequency  $\omega_x = 2\omega_y = 6.5 \times 10^{14}$  rad s<sup>-1</sup>. The wavelength of  $x$  polarized light required for the excitation of a particle from its ground state to the next allowed excited state is \_\_\_\_\_  $\times 10^{-6}$  m. (Round off to one decimal place)

(Speed of light  $c = 3.0 \times 10^8$  m s<sup>-1</sup>)

**END OF THE QUESTION PAPER**



<b>Q.No.</b>	<b>Type</b>	<b>Section</b>	<b>Key</b>	<b>Marks</b>
1	MCQ	GA	C	1
2	MCQ	GA	C	1
3	MCQ	GA	D	1
4	MCQ	GA	C	1
5	MCQ	GA	B	1
6	MCQ	GA	C	2
7	MCQ	GA	D	2
8	MCQ	GA	A	2
9	MCQ	GA	C	2
10	MCQ	GA	D	2
1	MCQ	CY	D	1
2	MCQ	CY	B	1
3	MCQ	CY	D	1
4	MCQ	CY	A	1
5	MCQ	CY	B	1
6	MCQ	CY	B	1
7	MCQ	CY	B	1
8	MCQ	CY	A	1
9	MCQ	CY	B	1
10	MCQ	CY	D	1
11	MCQ	CY	B	1
12	MCQ	CY	B	1
13	MCQ	CY	C	1

Q.No.	Type	Section	Key	Marks
14	NAT	CY	4 to 4	1
15	NAT	CY	5 to 5	1
16	NAT	CY	6 to 6	1
17	NAT	CY	3 to 3	1
18	NAT	CY	5 to 5	1
19	NAT	CY	11 to 11	1
20	NAT	CY	-126.00 to -120.00	1
21	NAT	CY	5.40 to 5.55	1
22	NAT	CY	1.25 to 1.30	1
23	NAT	CY	6 to 6	1
24	NAT	CY	3.9 to 3.9	1
25	NAT	CY	74.0 to 76.0	1
26	MCQ	CY	A	2
27	MCQ	CY	B	2
28	MCQ	CY	A	2
29	MCQ	CY	D	2
30	MCQ	CY	A	2
31	MCQ	CY	C	2
32	MCQ	CY	B	2
33	MCQ	CY	C	2
34	MCQ	CY	A	2
35	MCQ	CY	B	2
36	MCQ	CY	D	2

Q.No.	Type	Section	Key	Marks
37	MCQ	CY	D	2
38	MCQ	CY	C	2
39	MCQ	CY	C	2
40	MCQ	CY	B	2
41	MCQ	CY	B	2
42	MCQ	CY	C	2
43	MCQ	CY	B	2
44	MCQ	CY	B	2
45	NAT	CY	2 to 2 OR 4 to 4	2
46	NAT	CY	13 to 13	2
47	NAT	CY	2.50 to 2.65	2
48	NAT	CY	265 to 295	2
49	NAT	CY	-38.00 to -37.00	2
50	NAT	CY	120.00 to 140.00	2
51	NAT	CY	-12.90 to -12.40	2
52	NAT	CY	9 to 9	2
53	NAT	CY	0.5 to 0.5	2
54	NAT	CY	0 to 0	2
55	NAT	CY	2.8 to 3.0	2